

Name _____

Date _____




Counting Nickels

Look at real nickels.
Find the words "five cents."

A nickel is worth 5¢.

heads

tails



Directions: Count the cents. Write the value of the coins on the bank.





5¢

10¢


15¢

20¢


A.




B.



C.



D.



Name _____

Date _____

Coins in Coral

Directions: Look for coins. Tell how many heads and tails.



How many?



pennies



nickels



dimes



pennies



nickels



dimes

Something to Try!

Count the cents shown above. How much money in all? _____ cents