


Name _____

Date _____

How Many in All?



Directions: Draw a circle around each group of 10.
Fill in the missing numbers. See the example done for you.

A.



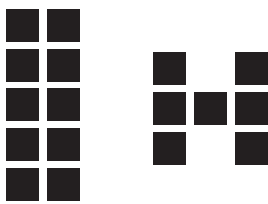
tens 1 ones 2 in all 12

B.



tens _____ ones _____ in all _____

C.




tens _____ ones _____ in all _____

D.



tens _____ ones _____ in all _____

E.



tens _____ ones _____ in all _____

F. Draw your own picture.

tens 3 ones 6 in all _____


Number Riddle

Directions: Look at each problem. Write the number on the line. Use the letter under each answer to solve the riddle.



1. 1 ten + 6 ones _____ <u>B</u>	2. 1 ten + 0 ones _____ <u>Z</u>	3. 2 tens + 0 ones _____ <u>W</u>
4. 2 tens + 3 ones _____ <u>F</u>	5. 2 tens + 9 ones _____ <u>H</u>	6. 3 tens + 1 one _____ <u>U</u>
7. 3 tens + 8 ones _____ <u>Y</u>	8. 4 tens + 3 ones _____ <u>T</u>	9. 5 tens + 7 ones _____ <u>D</u>

Riddle: What did the ladybug say to the bee?



10. 6 tens + 2 ones _____ <u>N</u>
--

Answer:

$\frac{20}{20}$ $\frac{29}{29}$ $\frac{38}{38}$ $\frac{57}{57}$ $\frac{0}{0}$ $\frac{62}{62}$ $\frac{43}{43}$ $\frac{38}{38}$ $\frac{0}{0}$ $\frac{31}{31}$
 $\frac{16}{16}$ $\frac{31}{31}$ $\frac{10}{10}$ $\frac{10}{10}$ $\frac{0}{0}$ $\frac{23}{23}$ $\frac{23}{23}$!